

13: UNSATURATED AND AROMATIC HYDROCARBONS



Anonymous
LibreTexts

CHAPTER OVERVIEW

13: Unsaturated and Aromatic Hydrocarbons

Our modern society is based to a large degree on the chemicals we discuss in this chapter. Most are made from petroleum. Alkanes—saturated hydrocarbons—have relatively few important chemical properties other than that they undergo combustion and react with halogens. Unsaturated hydrocarbons—hydrocarbons with double or triple bonds—on the other hand, are quite reactive. In fact, they serve as building blocks for many familiar plastics—polyethylene, vinyl plastics, acrylics—and other important synthetic materials (e.g., alcohols, antifreeze, and detergents). Aromatic hydrocarbons have formulas that can be drawn as cyclic alkenes, making them appear unsaturated, but their structure and properties are generally quite different, so they are not considered to be alkenes. Aromatic compounds serve as the basis for many drugs, antiseptics, explosives, solvents, and plastics (e.g., polyesters and polystyrene). The two simplest unsaturated compounds—ethylene (ethene) and acetylene (ethyne)—were once used as anesthetics and were introduced to the medical field in 1924. However, it was discovered that acetylene forms explosive mixtures with air, so its medical use was abandoned in 1925. Ethylene was thought to be safer, but it too was implicated in numerous lethal fires and explosions during anesthesia. Even so, it remained an important anesthetic into the 1960s, when it was replaced by nonflammable anesthetics such as halothane (CHBrClCF_3).

[13.0: Prelude to Unsaturated and Aromatic Hydrocarbons](#)

[13.1: Alkenes- Structures and Names](#)

[13.2: Cis-Trans Isomers \(Geometric Isomers\)](#)

[13.3: Physical Properties of Alkenes](#)

[13.4: Chemical Properties of Alkenes](#)

[13.5: Polymers](#)

[13.6: Alkynes](#)

[13.7: Aromatic Compounds- Benzene](#)

[13.8: Structure and Nomenclature of Aromatic Compounds](#)

[13.E: Unsaturated and Aromatic Hydrocarbons \(Exercises\)](#)

[13.S: Unsaturated and Aromatic Hydrocarbons \(Summary\)](#)

This page titled [13: Unsaturated and Aromatic Hydrocarbons](#) is shared under a [CC BY-NC-SA 4.0](#) license and was authored, remixed, and/or curated by [Anonymous](#) via [source content](#) that was edited to the style and standards of the LibreTexts platform; a detailed edit history is available upon request.

13.0: Prelude to Unsaturated and Aromatic Hydrocarbons

Our modern society is based to a large degree on the chemicals we discuss in this chapter. Most are made from petroleum. Alkanes—saturated hydrocarbons—have relatively few important chemical properties other than that they undergo combustion and react with halogens. Unsaturated hydrocarbons—hydrocarbons with double or triple bonds—on the other hand, are quite reactive. In fact, they serve as building blocks for many familiar plastics—polyethylene, vinyl plastics, acrylics—and other important synthetic materials (e.g., alcohols, antifreeze, and detergents). Aromatic hydrocarbons have formulas that can be drawn as cyclic alkenes, making them appear unsaturated, but their structure and properties are generally quite different, so they are not considered to be alkenes. Aromatic compounds serve as the basis for many drugs, antiseptics, explosives, solvents, and plastics (e.g., polyesters and polystyrene).

The two simplest unsaturated compounds—ethylene (ethene) and acetylene (ethyne)—were once used as anesthetics and were introduced to the medical field in 1924. However, it was discovered that acetylene forms explosive mixtures with air, so its medical use was abandoned in 1925. Ethylene was thought to be safer, but it too was implicated in numerous lethal fires and explosions during anesthesia. Even so, it remained an important anesthetic into the 1960s, when it was replaced by nonflammable anesthetics such as halothane (CHBrClCF_3).

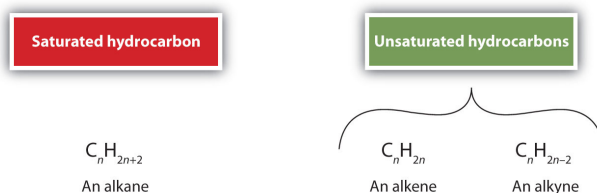
This page titled [13.0: Prelude to Unsaturated and Aromatic Hydrocarbons](#) is shared under a [CC BY-NC-SA 3.0](#) license and was authored, remixed, and/or curated by [Anonymous](#) via [source content](#) that was edited to the style and standards of the LibreTexts platform; a detailed edit history is available upon request.

13.1: Alkenes- Structures and Names

Learning Objectives

- To name alkenes given formulas and write formulas for alkenes given names.

As noted before, alkenes are hydrocarbons with carbon-to-carbon double bonds ($R_2C=CR_2$) and alkynes are hydrocarbons with carbon-to-carbon triple bonds ($R-C\equiv C-R$). Collectively, they are called unsaturated hydrocarbons because they have fewer hydrogen atoms than does an alkane with the same number of carbon atoms, as is indicated in the following general formulas:

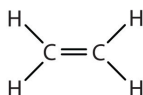


Some representative alkenes—their names, structures, and physical properties—are given in Table 13.1.1.

Table 13.1.1: Physical Properties of Some Selected Alkenes

IUPAC Name	Molecular Formula	Condensed Structural Formula	Melting Point (°C)	Boiling Point (°C)
ethene	C_2H_4	$CH_2=CH_2$	-169	-104
propene	C_3H_6	$CH_2=CHCH_3$	-185	-47
1-butene	C_4H_8	$CH_2=CHCH_2CH_3$	-185	-6
1-pentene	C_5H_{10}	$CH_2=CH(CH_2)_2CH_3$	-138	30
1-hexene	C_6H_{12}	$CH_2=CH(CH_2)_3CH_3$	-140	63
1-heptene	C_7H_{14}	$CH_2=CH(CH_2)_4CH_3$	-119	94
1-octene	C_8H_{16}	$CH_2=CH(CH_2)_5CH_3$	-102	121

We used only condensed structural formulas in Table 13.1.1. Thus, $CH_2=CH_2$ stands for



The double bond is shared by the two carbons and does not involve the hydrogen atoms, although the condensed formula does not make this point obvious. Note that the molecular formula for ethene is C_2H_4 , whereas that for ethane is C_2H_6 .

The first two alkenes in Table 13.1.1, ethene and propene, are most often called by their common names—ethylene and propylene, respectively (Figure 13.1.1). Ethylene is a major commercial chemical. The US chemical industry produces about 25 billion kilograms of ethylene annually, more than any other synthetic organic chemical. More than half of this ethylene goes into the manufacture of polyethylene, one of the most familiar plastics. Propylene is also an important industrial chemical. It is converted to plastics, isopropyl alcohol, and a variety of other products.

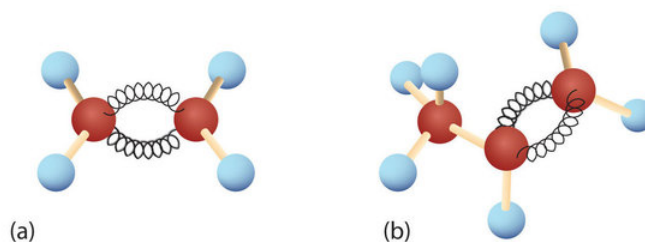
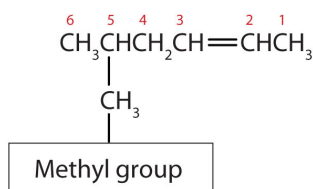


Figure 13.1.1: Ethene and Propene. The ball-and-spring models of ethene/ethylene (a) and propene/propylene (b) show their respective shapes, especially bond angles.

Although there is only one alkene with the formula C_2H_4 (ethene) and only one with the formula C_3H_6 (propene), there are several alkenes with the formula C_4H_8 .

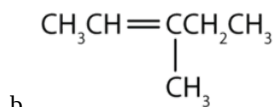
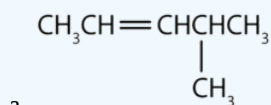
Here are some basic rules for naming alkenes from the International Union of Pure and Applied Chemistry (IUPAC):

1. The longest chain of carbon atoms *containing the double bond* is considered the parent chain. It is named using the same stem as the alkane having the same number of carbon atoms but ends in *-ene* to identify it as an alkene. Thus the compound $CH_2=CHCH_3$ is *propene*.
2. If there are four or more carbon atoms in a chain, we must indicate the position of the double bond. The carbon atoms are numbered so that the first of the two that are doubly bonded is given the lower of the two possible numbers. The compound $CH_3CH=CHCH_2CH_3$, for example, has the double bond between the second and third carbon atoms. Its name is 2-pentene (not 3-pentene).
3. Substituent groups are named as with alkanes, and their position is indicated by a number. Thus, the structure below is 5-methyl-2-hexene. Note that the numbering of the parent chain is always done in such a way as to give the double bond the lowest number, even if that causes a substituent to have a higher number. *The double bond always has priority in numbering.*



✓ Example 13.1.1

Name each compound.

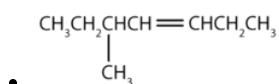
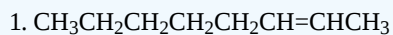


Solution

- a. The longest chain containing the double bond has five carbon atoms, so the compound is a *pentene* (rule 1). To give the first carbon atom of the double bond the lowest number (rule 2), we number from the left, so the compound is a 2-pentene. There is a methyl group on the fourth carbon atom (rule 3), so the compound's name is 4-methyl-2-pentene.
- b. The longest chain containing the double bond has five carbon atoms, so the parent compound is a *pentene* (rule 1). To give the first carbon atom of the double bond the lowest number (rule 2), we number from the left, so the compound is a 2-pentene. There is a methyl group on the third carbon atom (rule 3), so the compound's name is 3-methyl-2-pentene.

? Exercise 13.1.1

Name each compound.



Just as there are cycloalkanes, there are *cycloalkenes*. These compounds are named like alkenes, but with the prefix *cyclo-* attached to the beginning of the parent alkene name.

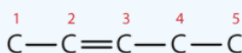
✓ Example 13.1.2

Draw the structure for each compound.

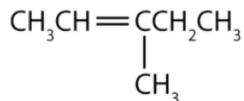
- 3-methyl-2-pentene
- cyclohexene

Solution

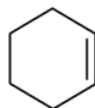
- First write the parent chain of five carbon atoms: C–C–C–C–C. Then add the double bond between the second and third carbon atoms:



Now place the methyl group on the third carbon atom and add enough hydrogen atoms to give each carbon atom a total of four bonds.



- First, consider what each of the three parts of the name means. *Cyclo* means a ring compound, *hex* means 6 carbon atoms, and *-ene* means a double bond.



? Exercise 13.1.2

Draw the structure for each compound.

- 2-ethyl-1-hexene
- cyclopentene

Key Takeaway

- Alkenes are hydrocarbons with a carbon-to-carbon double bond.

This page titled [13.1: Alkenes- Structures and Names](#) is shared under a [CC BY-NC-SA 4.0](#) license and was authored, remixed, and/or curated by [Anonymous](#) via [source content](#) that was edited to the style and standards of the LibreTexts platform; a detailed edit history is available upon request.

13.2: Cis-Trans Isomers (Geometric Isomers)

Learning Objectives

- Recognize that alkenes that can exist as cis-trans isomers.
- Classify isomers as cis or trans.
- Draw structures for cis-trans isomers given their names.

There is free rotation about the carbon-to-carbon single bonds (C–C) in alkanes. In contrast, the structure of alkenes requires that the carbon atoms of a double bond and the two atoms bonded to each carbon atom all lie in a single plane, and that each doubly bonded carbon atom lies in the center of a triangle. This part of the molecule's structure is rigid; rotation about doubly bonded carbon atoms is *not* possible without rupturing the bond. Look at the two chlorinated hydrocarbons in Figure 13.2.1.

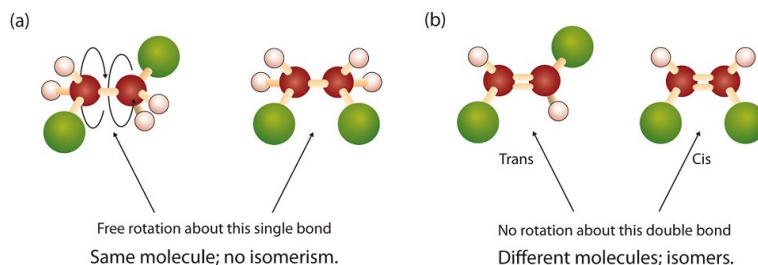


Figure 13.2.1: *Rotation about Bonds.* In 1,2-dichloroethane (a), free rotation about the C–C bond allows the two structures to be interconverted by a twist of one end relative to the other. In 1,2-dichloroethene (b), restricted rotation about the double bond means that the relative positions of substituent groups above or below the double bond are significant.

In 1,2-dichloroethane (part (a) of Figure 13.2.1), there is free rotation about the C–C bond. The two models shown represent exactly the same molecule; they are *not* isomers. You can draw structural formulas that look different, but if you bear in mind the possibility of this free rotation about single bonds, you should recognize that these two structures represent the same molecule:



In 1,2-dichloroethene (Figure 13.2.1b), however, restricted rotation about the double bond means that the relative positions of substituent groups above or below the double bond become significant. This leads to a special kind of isomerism. The isomer in which the two chlorine (Cl) atoms lie on the same side of the molecule is called the *cis* isomer (Latin *cis*, meaning “on this side”) and is named *cis*-1,2-dichloroethene. The isomer with the two Cl atoms on opposite sides of the molecule is the *trans* isomer (Latin *trans*, meaning “across”) and is named *trans*-1,2-dichloroethene. These two compounds are *cis-trans* isomers (or *geometric isomers*), compounds that have different configurations (groups permanently in different places in space) because of the presence of a rigid structure in their molecule.

Consider the alkene with the condensed structural formula $\text{CH}_3\text{CH}=\text{CHCH}_3$. We could name it 2-butene, but there are actually two such compounds; the double bond results in *cis-trans* isomerism (Figure 13.2.2).

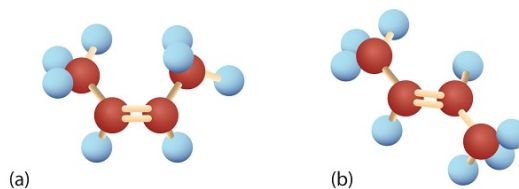


Figure 13.2.2: Ball-and-Spring Models of (a) *Cis*-2-Butene and (b) *Trans*-2-Butene. *Cis-trans* isomers have different physical, chemical, and physiological properties.

Cis-2-butene has both methyl groups on the same side of the molecule. *Trans*-2-butene has the methyl groups on opposite sides of the molecule. Their structural formulas are as follows:




Figure 13.2.3: Models of (left) *Cis-2-Butene* and (right) *Trans-2-Butene*.

Note, however, that the presence of a double bond does **not** necessarily lead to cis-trans isomerism (Figure 13.2.4). We can draw two *seemingly* different propenes:



Figure 13.2.4: Different views of the propene molecule (flip vertically). These are not isomers.

However, these two structures are not really different from each other. If you could pick up either molecule from the page and flip it over top to bottom, you would see that the two formulas are identical. Thus there are two requirements for cis-trans isomerism:

1. Rotation must be restricted in the molecule.
2. There must be **two nonidentical groups on each** doubly bonded carbon atom.

In these propene structures, the second requirement for cis-trans isomerism is not fulfilled. One of the doubly bonded carbon atoms does have two different groups attached, but the rules require that *both* carbon atoms have two different groups. In general, the following statements hold true in cis-trans isomerism:

- Alkenes with a $\text{C}=\text{CH}_2$ unit do not exist as cis-trans isomers.
- Alkenes with a $\text{C}=\text{CR}_2$ unit, where the two R groups are the same, do not exist as cis-trans isomers.
- Alkenes of the type $\text{R}-\text{CH}=\text{CH}-\text{R}$ can exist as cis and trans isomers; cis if the two R groups are on the same side of the carbon-to-carbon double bond, and trans if the two R groups are on opposite sides of the carbon-to-carbon double bond.

Advanced Note: E/Z Isomerization

If a molecule has a $\text{C}=\text{C}$ bond with one non-hydrogen group attached to each of the carbons, cis/trans nomenclature described above is enough to describe it. However, if you have three different groups (or four), then the cis/trans approach is insufficient to describe the different isomers, since we do not know which two of the three groups are being described. For example, if you have a $\text{C}=\text{C}$ bond, with a methyl group and a bromine on one carbon, and an ethyl group on the other, it is neither trans nor cis, since it is not clear whether the ethyl group is trans to the bromine or the methyl. This is addressed with a more advanced [E,Z Convention](#) [E] [E] [E] discussed elsewhere.

Cis-trans isomerism also occurs in cyclic compounds. In ring structures, groups are unable to rotate about any of the ring carbon-carbon bonds. Therefore, groups can be either on the same side of the ring (cis) or on opposite sides of the ring (trans). For our purposes here, we represent all cycloalkanes as planar structures, and we indicate the positions of the groups, either above or below the plane of the ring.



Example 13.2.1

Which compounds can exist as cis-trans (geometric) isomers? Draw them.


1. $\text{CHCl}=\text{CHBr}$
2. $\text{CH}_2=\text{CBrCH}_3$
3. $(\text{CH}_3)_2\text{C}=\text{CHCH}_2\text{CH}_3$

4. $\text{CH}_3\text{CH}=\text{CHCH}_2\text{CH}_3$


Solution

All four structures have a double bond and thus meet rule 1 for cis-trans isomerism.

1. This compound meets rule 2; it has two nonidentical groups on *each* carbon atom (H and Cl on one and H and Br on the other). It exists as both cis and trans isomers:



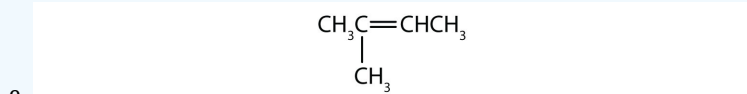
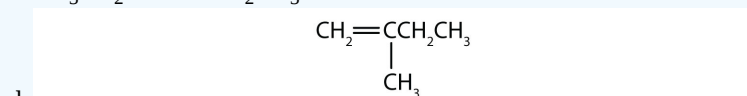
2. This compound has two hydrogen atoms on one of its doubly bonded carbon atoms; it fails rule 2 and does not exist as cis and trans isomers.
3. This compound has two methyl (CH_3) groups on one of its doubly bonded carbon atoms. It fails rule 2 and does not exist as cis and trans isomers.
4. This compound meets rule 2; it has two nonidentical groups on *each* carbon atom and exists as both cis and trans isomers:



? Exercise 13.2.1

Which compounds can exist as cis-trans isomers? Draw them.

- a. $\text{CH}_2=\text{CHCH}_2\text{CH}_2\text{CH}_3$
- b. $\text{CH}_3\text{CH}=\text{CHCH}_2\text{CH}_3$
- c. $\text{CH}_3\text{CH}_2\text{CH}=\text{CHCH}_2\text{CH}_3$



Key Takeaway

- Cis-trans (geometric) isomerism exists when there is restricted rotation in a molecule and there are two nonidentical groups on *each* doubly bonded carbon atom.

This page titled [13.2: Cis-Trans Isomers \(Geometric Isomers\)](#) is shared under a [CC BY-NC-SA 4.0](#) license and was authored, remixed, and/or curated by [Anonymous](#) via [source content](#) that was edited to the style and standards of the LibreTexts platform; a detailed edit history is available upon request.

13.3: Physical Properties of Alkenes

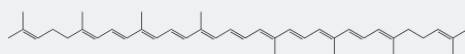

Learning Objectives

- To identify the physical properties of alkenes and describe trends in these properties.

The physical properties of alkenes are similar to those of the alkanes. The [table at the start of the chapter](#) shows that the boiling points of straight-chain alkenes increase with increasing molar mass, just as with alkanes. For molecules with the same number of carbon atoms and the same general shape, the boiling points usually differ only slightly, just as we would expect for substances whose molar mass differs by only 2 u (equivalent to two hydrogen atoms). Like other hydrocarbons, the alkenes are insoluble in water but soluble in organic solvents.

Looking Closer: Environmental Note

Alkenes occur widely in nature. Ripening fruits and vegetables give off ethylene, which triggers further ripening. Fruit processors artificially introduce ethylene to hasten the ripening process; exposure to as little as 0.1 mg of ethylene for 24 h can ripen 1 kg of tomatoes. Unfortunately, this process does not exactly duplicate the ripening process, and tomatoes picked green and treated this way don't taste much like vine-ripened tomatoes fresh from the garden.



The bright red color of tomatoes is due to lycopene—a polyene.

Other alkenes that occur in nature include 1-octene, a constituent of lemon oil, and octadecene ($C_{18}H_{36}$) found in fish liver. Dienes (two double bonds) and polyenes (three or more double bonds) are also common. Butadiene ($CH_2=CHCH=CH_2$) is found in coffee. Lycopene and the carotenes are isomeric polyenes ($C_{40}H_{56}$) that give the attractive red, orange, and yellow colors to watermelons, tomatoes, carrots, and other fruits and vegetables. Vitamin A, essential to good vision, is derived from a carotene. The world would be a much less colorful place without alkenes.

Key Takeaway

- The physical properties of alkenes are much like those of the alkanes: their boiling points increase with increasing molar mass, and they are insoluble in water.

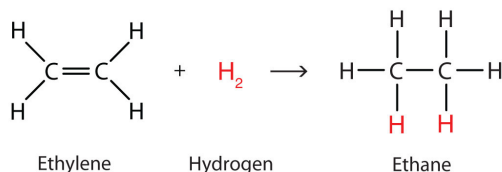
This page titled [13.3: Physical Properties of Alkenes](#) is shared under a [CC BY-NC-SA 4.0](#) license and was authored, remixed, and/or curated by [Anonymous](#) via [source content](#) that was edited to the style and standards of the LibreTexts platform; a detailed edit history is available upon request.

13.4: Chemical Properties of Alkenes

Learning Objectives

- To write equations for the addition reactions of alkenes with hydrogen, halogens, and water

Alkenes are valued mainly for addition reactions, in which one of the bonds in the double bond is broken. Each of the carbon atoms in the bond can then attach another atom or group while remaining joined to each other by a single bond. Perhaps the simplest addition reaction is hydrogenation—a reaction with hydrogen (H_2) in the presence of a catalyst such as nickel (Ni) or platinum (Pt).

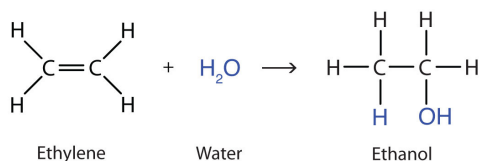


The product is an alkane having the same carbon skeleton as the alkene.

Alkenes also readily undergo halogenation—the addition of halogens. Indeed, the reaction with bromine (Br_2) can be used to test for alkenes. Bromine solutions are brownish red. When we add a Br_2 solution to an alkene, the color of the solution disappears because the alkene reacts with the bromine:



Another important addition reaction is that between an alkene and water to form an alcohol. This reaction, called hydration, requires a catalyst—usually a strong acid, such as sulfuric acid (H_2SO_4):



The hydration reaction is discussed later, where we deal with this reaction in the synthesis of alcohols.

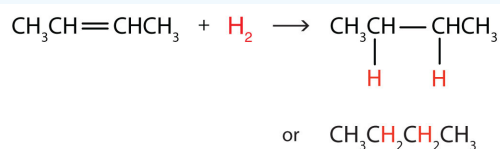
✓ Example 13.4.1

Write the equation for the reaction between $\text{CH}_3\text{CH}=\text{CHCH}_3$ and each substance.

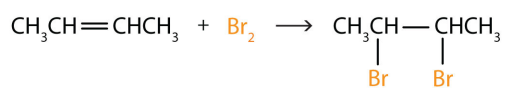
- H_2 (Ni catalyst)
- Br_2
- H_2O (H_2SO_4 catalyst)

Solution

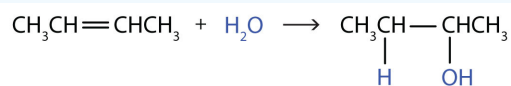
In each reaction, the reagent adds across the double bond.



a.



b.



c.



? Exercise 13.4.1

Write the equation for each reaction.

- $\text{CH}_3\text{CH}_2\text{CH}=\text{CH}_2$ with H_2 (Ni catalyst)
- $\text{CH}_3\text{CH}=\text{CH}_2$ with Cl_2
- $\text{CH}_3\text{CH}_2\text{CH}=\text{CHCH}_2\text{CH}_3$ with H_2O (H_2SO_4 catalyst)

Key Takeaway

- Alkenes undergo addition reactions, adding such substances as hydrogen, bromine, and water across the carbon-to-carbon double bond.

This page titled [13.4: Chemical Properties of Alkenes](#) is shared under a [CC BY-NC-SA 4.0](#) license and was authored, remixed, and/or curated by [Anonymous](#) via [source content](#) that was edited to the style and standards of the LibreTexts platform; a detailed edit history is available upon request.

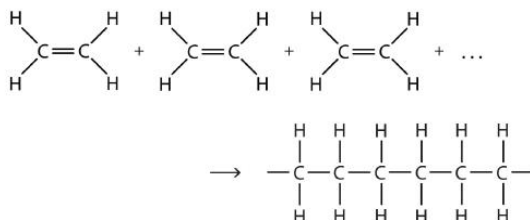
13.5: Polymers

Learning Objectives

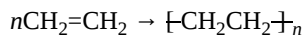
- To draw structures for monomers that can undergo addition polymerization and for four-monomer-unit sections of an addition polymer.

The most important commercial reactions of alkenes are *polymerizations*, reactions in which small molecules, referred to in general as monomers (from the Greek *monos*, meaning “one,” and *meros*, meaning “parts”), are assembled into giant molecules referred to as polymers (from the Greek *poly*, meaning “many,” and *meros*, meaning “parts”). A polymer is as different from its monomer as a long strand of spaghetti is from a tiny speck of flour. For example, polyethylene, the familiar waxy material used to make plastic bags, is made from the monomer ethylene—a gas.

There are two general types of polymerization reactions: addition polymerization and condensation polymerization. In addition polymerization, the monomers add to one another in such a way that the polymer contains all the atoms of the starting monomers. Ethylene molecules are joined together in long chains. The polymerization can be represented by the reaction of a few monomer units:



The bond lines extending at the ends in the formula of the product indicate that the structure extends for many units in each direction. Notice that all the atoms—two carbon atoms and four hydrogen atoms—of each monomer molecule are incorporated into the polymer structure. Because displays such as the one above are cumbersome, the polymerization is often abbreviated as follows:



Many natural materials—such as proteins, cellulose and starch, and complex silicate minerals—are polymers. Artificial fibers, films, plastics, semisolid resins, and rubbers are also polymers. More than half the compounds produced by the chemical industry are synthetic polymers.

Some common addition polymers are listed in Table 13.5.1. Note that all the monomers have carbon-to-carbon double bonds. Many polymers are mundane (e.g., plastic bags, food wrap, toys, and tableware), but there are also polymers that conduct electricity, have amazing adhesive properties, or are stronger than steel but much lighter in weight.

Table 13.5.1: Some Addition Polymers

Monomer	Polymer	Polymer Name	Some Uses
$\text{CH}_2=\text{CH}_2$	$\sim\text{CH}_2\text{CH}_2\text{CH}_2\text{CH}_2\text{CH}_2\text{CH}_2\sim$	polyethylene	plastic bags, bottles, toys, electrical insulation
$\text{CH}_2=\text{CHCH}_3$	$ \begin{array}{c} \sim\text{CH}_2\text{CHCH}_2\text{CHCH}_2\text{CH}\sim \\ \quad \quad \\ \text{CH}_3 \quad \text{CH}_3 \quad \text{CH}_3 \end{array} $	polypropylene	carpeting, bottles, luggage, exercise clothing
$\text{CH}_2=\text{CHCl}$	$ \begin{array}{c} \sim\text{CH}_2\text{CHCH}_2\text{CHCH}_2\text{CH}\sim \\ \quad \quad \\ \text{Cl} \quad \text{Cl} \quad \text{Cl} \end{array} $	polyvinyl chloride	bags for intravenous solutions, pipes, tubing, floor coverings
$\text{CF}_2=\text{CF}_2$	$\sim\text{CF}_2\text{CF}_2\text{CF}_2\text{CF}_2\text{CF}_2\text{CF}_2\sim$	polytetrafluoroethylene	nonstick coatings, electrical insulation

Medical Uses of Polymers

An interesting use of polymers is the replacement of diseased, worn out, or missing parts in the body. For example, about a 250,000 hip joints and 500,000 knees are replaced in US hospitals each year. The artificial ball-and-socket hip joints are made of a special steel (the ball) and plastic (the socket). People crippled by arthritis or injuries gain freedom of movement and relief from pain. Patients with heart and circulatory problems can be helped by replacing worn out heart valves with parts based on synthetic polymers. These are only a few of the many biomedical uses of polymers.

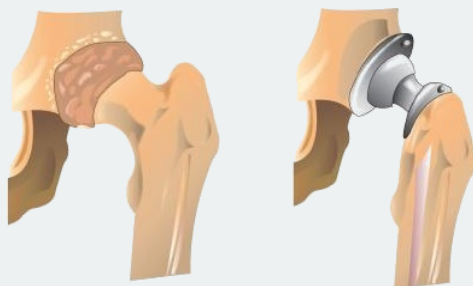


Figure 13.5.1: Hip Joint Replacement. Synthetic polymers are an important part of a hip joint replacement. The hip is much like a ball-and-socket joint, and total hip replacements mimic this with a metal ball that fits in a plastic cup.

Key Takeaway

- Molecules having carbon-to-carbon double bonds can undergo addition polymerization.

13.5: Polymers is shared under a [CC BY-NC-SA 4.0](https://creativecommons.org/licenses/by-nc-sa/4.0/) license and was authored, remixed, and/or curated by LibreTexts.

13.6: Alkynes

Learning Objectives

- Describe the general physical and chemical properties of alkynes.
- Name alkynes given formulas and write formulas for alkynes given names.

The simplest alkyne—a hydrocarbon with carbon-to-carbon triple bond—has the molecular formula C_2H_2 and is known by its common name—acetylene (Figure 13.6.1). Its structure is $H-C\equiv C-H$.

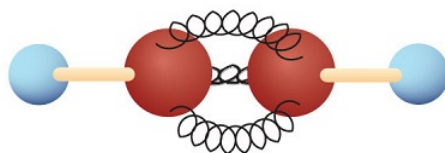


Figure 13.6.1: Ball-and-Spring Model of Acetylene. Acetylene (ethyne) is the simplest member of the alkyne family.

Acetylene is used in oxyacetylene torches for cutting and welding metals. The flame from such a torch can be very hot. Most acetylene, however, is converted to chemical intermediates that are used to make vinyl and acrylic plastics, fibers, resins, and a variety of other products.

Alkynes are similar to alkenes in both physical and chemical properties. For example, alkynes undergo many of the typical addition reactions of alkenes. The International Union of Pure and Applied Chemistry (IUPAC) names for alkynes parallel those of alkenes, except that the family ending is *-yne* rather than *-ene*. The IUPAC name for acetylene is ethyne. The names of other alkynes are illustrated in the following exercises.

Key Takeaway

- Alkynes are hydrocarbons with carbon-to-carbon triple bonds and properties much like those of alkenes.

This page titled [13.6: Alkynes](#) is shared under a [CC BY-NC-SA 4.0](#) license and was authored, remixed, and/or curated by [Anonymous](#) via [source content](#) that was edited to the style and standards of the LibreTexts platform; a detailed edit history is available upon request.

13.7: Aromatic Compounds- Benzene

Learning Objectives

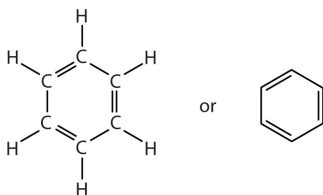
- To describe the bonding in benzene and the way typical reactions of benzene differ from those of the alkenes.

Next we consider a class of hydrocarbons with molecular formulas like those of unsaturated hydrocarbons, but which, unlike the alkenes, do not readily undergo addition reactions. These compounds comprise a distinct class, called aromatic hydrocarbons, with unique structures and properties. We start with the simplest of these compounds. Benzene (C_6H_6) is of great commercial importance, but it also has noteworthy health effects.

The formula C_6H_6 seems to indicate that benzene has a high degree of unsaturation. (Hexane, the saturated hydrocarbon with six carbon atoms has the formula C_6H_{14} —eight more hydrogen atoms than benzene.) However, despite the seeming low level of saturation, benzene is rather unreactive. It does not, for example, react readily with bromine, which, is a test for unsaturation.

Benzene is a liquid that smells like gasoline, boils at $80^\circ C$, and freezes at $5.5^\circ C$. It is the aromatic hydrocarbon produced in the largest volume. It was formerly used to decaffeinate coffee and was a significant component of many consumer products, such as paint strippers, rubber cements, and home dry-cleaning spot removers. It was removed from many product formulations in the 1950s, but others continued to use benzene in products until the 1970s when it was associated with leukemia deaths. Benzene is still important in industry as a precursor in the production of plastics (such as Styrofoam and nylon), drugs, detergents, synthetic rubber, pesticides, and dyes. It is used as a solvent for such things as cleaning and maintaining printing equipment and for adhesives such as those used to attach soles to shoes. Benzene is a natural constituent of petroleum products, but because it is a known carcinogen, its use as an additive in gasoline is now limited.

To explain the surprising properties of benzene, chemists suppose the molecule has a cyclic, hexagonal, planar structure of six carbon atoms with one hydrogen atom bonded to each. We can write a structure with alternate single and double bonds, either as a full structural formula or as a line-angle formula:



However, these structures do not explain the unique properties of benzene. Furthermore, experimental evidence indicates that all the carbon-to-carbon bonds in benzene are equivalent, and the molecule is unusually stable. Chemists often represent benzene as a hexagon with an inscribed circle:



The inner circle indicates that the valence electrons are shared equally by all six carbon atoms (that is, the electrons are *delocalized*, or spread out, over all the carbon atoms). It is understood that each corner of the hexagon is occupied by one carbon atom, and each carbon atom has one hydrogen atom attached to it. Any other atom or groups of atoms substituted for a hydrogen atom must be shown bonded to a particular corner of the hexagon. We use this modern symbolism, but many scientists still use the earlier structure with alternate double and single bonds.

To Your Health: Benzene and Us

Most of the benzene used commercially comes from petroleum. It is employed as a starting material for the production of detergents, drugs, dyes, insecticides, and plastics. Once widely used as an organic solvent, benzene is now known to have both short- and long-term toxic effects. The inhalation of large concentrations can cause nausea and even death due to respiratory or

heart failure, while repeated exposure leads to a progressive disease in which the ability of the bone marrow to make new blood cells is eventually destroyed. This results in a condition called *aplastic anemia*, in which there is a decrease in the numbers of both the red and white blood cells.

Key Takeaway

- Aromatic hydrocarbons appear to be unsaturated, but they have a special type of bonding and do not undergo addition reactions.

This page titled [13.7: Aromatic Compounds- Benzene](#) is shared under a [CC BY-NC-SA 4.0](#) license and was authored, remixed, and/or curated by [Anonymous](#) via [source content](#) that was edited to the style and standards of the LibreTexts platform; a detailed edit history is available upon request.

13.8: Structure and Nomenclature of Aromatic Compounds

Learning Objectives

- Recognize aromatic compounds from structural formulas.
- Name aromatic compounds given formulas.
- Write formulas for aromatic compounds given their names.

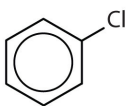
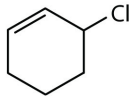
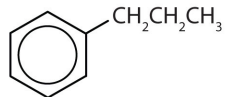
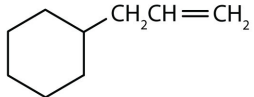
Historically, benzene-like substances were called aromatic hydrocarbons because they had distinctive aromas. Today, an aromatic compound is any compound that contains a benzene ring or has certain benzene-like properties (but not necessarily a strong aroma). You can recognize the aromatic compounds in this text by the presence of one or more benzene rings in their structure. Some representative aromatic compounds and their uses are listed in Table 13.8.1, where the benzene ring is represented as C_6H_5 .

Table 13.8.1: Some Representative Aromatic Compounds

Name	Structure	Typical Uses
aniline	$C_6H_5-NH_2$	starting material for the synthesis of dyes, drugs, resins, varnishes, perfumes; solvent; vulcanizing rubber
benzoic acid	C_6H_5-COOH	food preservative; starting material for the synthesis of dyes and other organic compounds; curing of tobacco
bromobenzene	C_6H_5-Br	starting material for the synthesis of many other aromatic compounds; solvent; motor oil additive
nitrobenzene	$C_6H_5-NO_2$	starting material for the synthesis of aniline; solvent for cellulose nitrate; in soaps and shoe polish
phenol	C_6H_5-OH	disinfectant; starting material for the synthesis of resins, drugs, and other organic compounds
toluene	$C_6H_5-CH_3$	solvent; gasoline octane booster; starting material for the synthesis of benzoic acid, benzaldehyde, and many other organic compounds

✓ Example 13.8.1

Which compounds are aromatic?

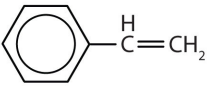


- 
- 
- 
- 

Solution

1. The compound has a benzene ring (with a chlorine atom substituted for one of the hydrogen atoms); it is aromatic.
2. The compound is cyclic, but it does not have a benzene ring; it is not aromatic.
3. The compound has a benzene ring (with a propyl group substituted for one of the hydrogen atoms); it is aromatic.
4. The compound is cyclic, but it does not have a benzene ring; it is not aromatic.

? Exercise 13.8.1

Which compounds are aromatic?

1.	
2.	
3.	

In the International Union of Pure and Applied Chemistry (IUPAC) system, aromatic hydrocarbons are named as derivatives of benzene. Figure 13.8.1 shows four examples. In these structures, it is immaterial whether the single substituent is written at the top, side, or bottom of the ring: a hexagon is symmetrical, and therefore all positions are equivalent.

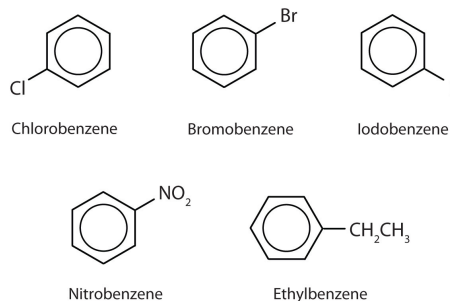
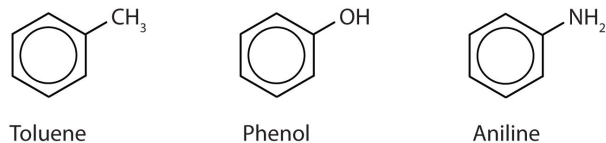


Figure 13.8.1: Some Benzene Derivatives. These compounds are named in the usual way with the group that replaces a hydrogen atom named as a substituent group: Cl as chloro, Br as bromo, I as iodo, NO₂ as nitro, and CH₃CH₂ as ethyl.

Although some compounds are referred to exclusively by IUPAC names, some are more frequently denoted by common names, as is indicated in Table 13.8.1.



When there is more than one substituent, the corners of the hexagon are no longer equivalent, so we must designate the relative positions. There are three possible disubstituted benzenes, and we can use numbers to distinguish them (Figure 13.8.2). We start numbering at the carbon atom to which one of the groups is attached and count toward the carbon atom that bears the other substituent group by the shortest path.

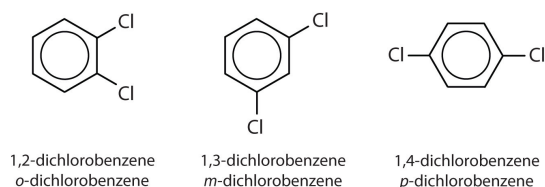
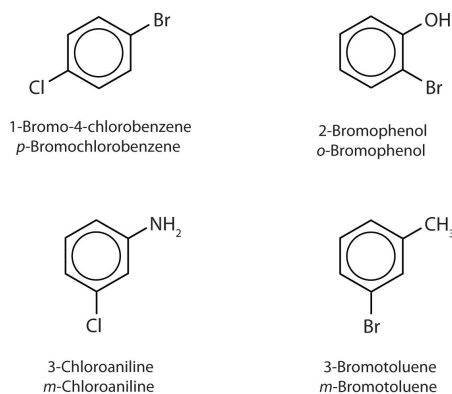


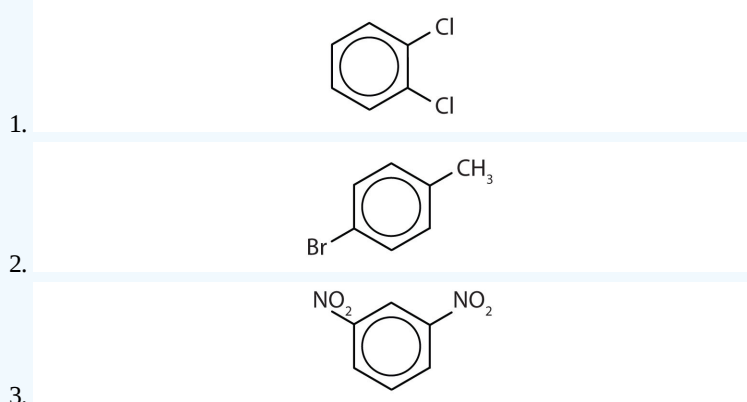
Figure 13.8.2: The Three Isomeric Dichlorobenzenes

In Figure 13.8.2 common names are also used: the prefix *ortho* (*o-*) for 1,2-disubstitution, *meta* (*m-*) for 1,3-disubstitution, and *para* (*p-*) for 1,4-disubstitution. The substituent names are listed in alphabetical order. The first substituent is given the lowest number. When a common name is used, the carbon atom that bears the group responsible for the name is given the number 1:



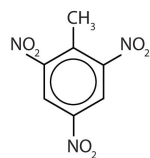
✓ Example 13.8.2

Name each compound using both the common name and the IUPAC name.



Solution

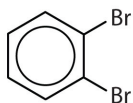
- The benzene ring has two chlorine atoms (dichloro) in the first and second positions. The compound is *o*-dichlorobenzene or 1,2-dichlorobenzene.
- The benzene ring has a methyl (CH_3) group. The compound is therefore named as a derivative of toluene. The bromine atom is on the fourth carbon atom, counting from the methyl group. The compound is *p*-bromotoluene or 4-bromotoluene.
- The benzene ring has two nitro (NO_2) groups in the first and third positions. It is *m*-dinitrobenzene or 1,3-dinitrobenzene.
- Note: The nitro (NO_2) group is a common substituent in aromatic compounds. Many nitro compounds are explosive, most notably 2,4,6-trinitrotoluene (TNT).



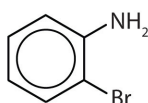
? Exercise 13.8.2

Name each compound using both the common name and the IUPAC name.

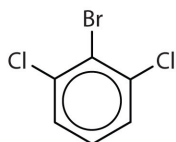
1.



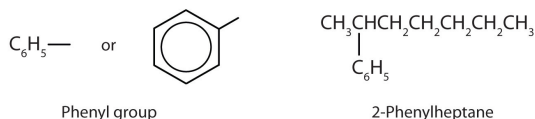
2.



3.

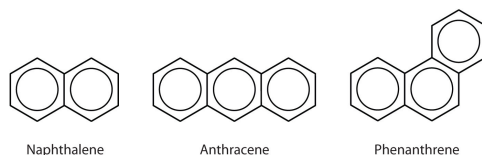


- Sometimes an aromatic group is found as a substituent bonded to a nonaromatic entity or to another aromatic ring. The group of atoms remaining when a hydrogen atom is removed from an aromatic compound is called an aryl group. The most common aryl group is derived from benzene (C_6H_6) by removing one hydrogen atom (C_6H_5) and is called a *phenyl* group, from *pheno*, an old name for benzene.



Polycyclic Aromatic Hydrocarbons

Some common aromatic hydrocarbons consist of fused benzene rings—rings that share a common side. These compounds are called polycyclic aromatic hydrocarbons (PAHs).



The three examples shown here are colorless, crystalline solids generally obtained from coal tar. Naphthalene has a pungent odor and is used in mothballs. Anthracene is used in the manufacture of certain dyes. Steroids, a large group of naturally occurring substances, contain the phenanthrene structure.

To Your Health: Polycyclic Aromatic Hydrocarbons and Cancer

The intense heating required for distilling coal tar results in the formation of PAHs. For many years, it has been known that workers in coal-tar refineries are susceptible to a type of skin cancer known as tar cancer. Investigations have shown that a number of PAHs are carcinogens. One of the most active carcinogenic compounds, benzopyrene, occurs in coal tar and has also been isolated from cigarette smoke, automobile exhaust gases, and charcoal-broiled steaks. It is estimated that more than 1,000 t of benzopyrene are

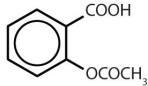
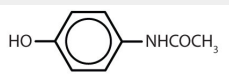
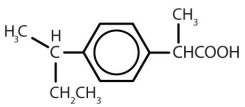
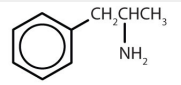
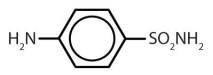
emitted into the air over the United States each year. Only a few milligrams of benzopyrene per kilogram of body weight are required to induce cancer in experimental animals.

Biologically Important Compounds with Benzene Rings

Substances containing the benzene ring are common in both animals and plants, although they are more abundant in the latter. Plants can synthesize the benzene ring from carbon dioxide, water, and inorganic materials. Animals cannot synthesize it, but they are dependent on certain aromatic compounds for survival and therefore must obtain them from food. Phenylalanine, tyrosine, and tryptophan (essential amino acids) and vitamins K, B₂ (riboflavin), and B₉ (folic acid) all contain the benzene ring. Many important drugs, a few of which are shown in Table 13.8.2 also feature a benzene ring.

So far we have studied only aromatic compounds with carbon-containing rings. However, many cyclic compounds have an element other than carbon atoms in the ring. These compounds, called *heterocyclic compounds*, are discussed later. Some of these are heterocyclic aromatic compounds.

Table 13.8.2: Some Drugs That Contain a Benzene Ring

Name	Structure
aspirin	
acetaminophen	
ibuprofen	
amphetamine	
sulfanilamide	

Key Takeaway

- Aromatic compounds contain a benzene ring or have certain benzene-like properties; for our purposes, you can recognize aromatic compounds by the presence of one or more benzene rings in their structure.

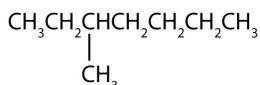
This page titled [13.8: Structure and Nomenclature of Aromatic Compounds](#) is shared under a [CC BY-NC-SA 4.0](#) license and was authored, remixed, and/or curated by [Anonymous](#) via [source content](#) that was edited to the style and standards of the LibreTexts platform; a detailed edit history is available upon request.

13.E: Unsaturated and Aromatic Hydrocarbons (Exercises)

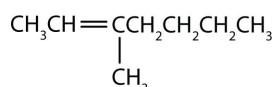
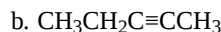
13.1: Alkenes- Structures and Names

Concept Review Exercises

- Briefly identify the important distinctions between a saturated hydrocarbon and an unsaturated hydrocarbon.
- Briefly identify the important distinctions between an alkene and an alkane.
- Classify each compound as saturated or unsaturated. Identify each as an alkane, an alkene, or an alkyne.



a.



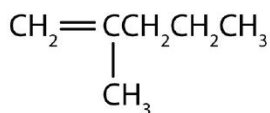
c.

Answers

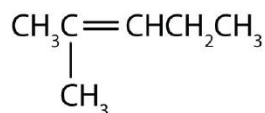
- Unsaturated hydrocarbons have double or triple bonds and are quite reactive; saturated hydrocarbons have only single bonds and are rather unreactive.
- An alkene has a double bond; an alkane has single bonds only.
- saturated; alkane
 - unsaturated; alkyne
 - unsaturated; alkene

Exercises

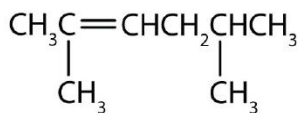
- Draw the structure for each compound.
 - 2-methyl-2-pentene
 - 2,3-dimethyl-1-butene
 - cyclohexene
- Draw the structure for each compound.
 - 5-methyl-1-hexene
 - 3-ethyl-2-pentene
 - 4-methyl-2-hexene
- Name each compound according to the IUPAC system.



a.

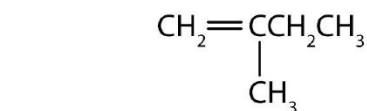


b.

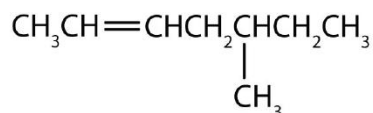


c.

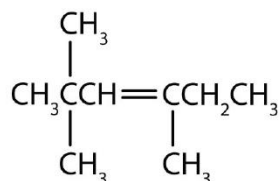
- Name each compound according to the IUPAC system.



a.

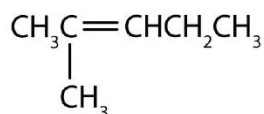


b.

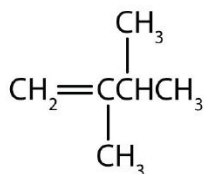


c.

Answers



1. a.



b.




c.

3. a. 2-methyl-1-pentene
 b. 2-methyl-2-pentene
 c. 2,5-dimethyl-2-hexene

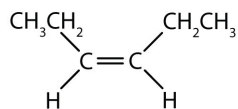
13.2: Cis-Trans Isomers (Geometric Isomers)

Concept Review Exercises

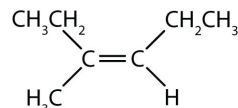
- What are cis-trans (geometric) isomers? What two types of compounds can exhibit cis-trans isomerism?
- Classify each compound as a cis isomer, a trans isomer, or neither.



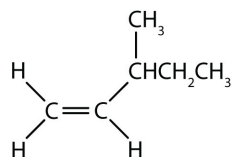
a.



b.



c.



d.

Answers

- Cis-trans isomers are compounds that have different configurations (groups permanently in different places in space) because of the presence of a rigid structure in their molecule. Alkenes and cyclic compounds can exhibit cis-trans isomerism.
- trans (the two hydrogen atoms are on opposite sides)
 - cis (the two hydrogen atoms are on the same side, as are the two ethyl groups)
 - cis (the two ethyl groups are on the same side)
 - neither (flipping the bond does not change the molecule. There are no isomers for this molecule)

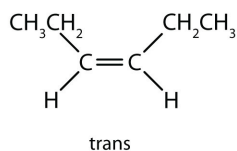
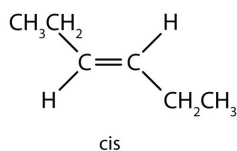
Exercises

- Draw the structures of the cis-trans isomers for each compound. Label them cis and trans. If no cis-trans isomers exist, write none.
 - 2-bromo-2-pentene
 - 3-hexene
 - 4-methyl-2-pentene
 - 1,1-dibromo-1-butene
 - 2-butenic acid ($\text{CH}_3\text{CH}=\text{CHCOOH}$)
- Draw the structures of the cis-trans isomers for each compound. Label them cis and trans. If no cis-trans isomers exist, write none.
 - 2,3-dimethyl-2-pentene
 - 1,1-dimethyl-2-ethylcyclopropane
 - 1,2-dimethylcyclohexane
 - 5-methyl-2-hexene
 - 1,2,3-trimethylcyclopropane

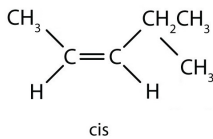
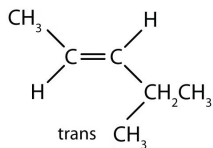
Answer

- none. There are two distinct geometric isomers, but since there are there are four different groups off the double bond, these are both cis/trans isomers (they are technically E/Z isomers discussed elsewhere).

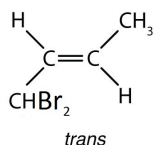
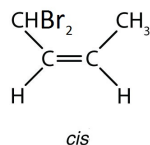
b:

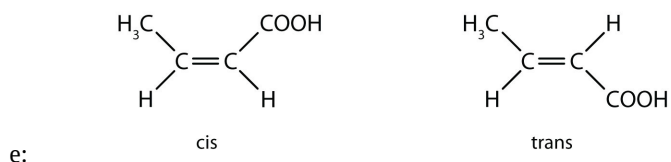


c:



d:





13.3: Physical Properties of Alkenes

Concept Review Exercises

- Briefly describe the physical properties of alkenes. How do these properties compare to those of the alkanes?
- Without consulting tables, arrange the following alkenes in order of increasing boiling point: 1-butene, ethene, 1-hexene, and propene.

Answers

- Alkenes have physical properties (low boiling points, insoluble in water) quite similar to those of their corresponding alkanes.
- ethene < propene < 1-butene < 1-hexene

Exercises

- Without referring to a table or other reference, predict which member of each pair has the higher boiling point.
 - 1-pentene or 1-butene
 - 3-heptene or 3-nonene
- Which is a good solvent for cyclohexene, pentane or water?

Answer

- 1-pentene
 - 3-nonene

13.4: Chemical Properties of Alkenes

Concept Review Exercises

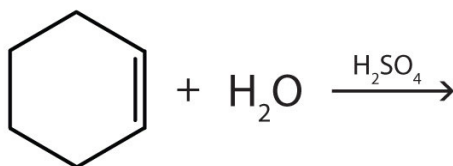
- What is the principal difference in properties between alkenes and alkanes? How are they alike?
- If $\text{C}_{12}\text{H}_{24}$ reacts with HBr in an addition reaction, what is the molecular formula of the product?

Answers

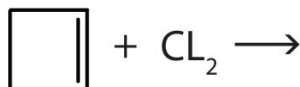
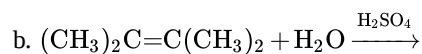
- Alkenes undergo addition reactions; alkanes do not. Both burn.
- $\text{C}_{12}\text{H}_{24}\text{Br}_2$

Exercises

- Complete each equation.
 - $(\text{CH}_3)_2\text{C}=\text{CH}_2 + \text{Br}_2 \rightarrow$
 - $\text{CH}_2=\text{C}(\text{CH}_3)\text{CH}_2\text{CH}_3 + \text{H}_2 \xrightarrow{\text{Ni}}$



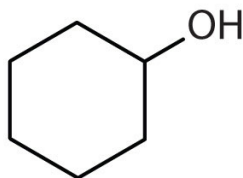
- Complete each equation.
 - $\text{CH}_2=\text{CHCH}=\text{CH}_2 + 2\text{H}_2 \xrightarrow{\text{Ni}}$



c.

Answer

1. a. $(\text{CH}_3)_2\text{CBrCH}_2\text{Br}$
- b. $\text{CH}_3\text{CH}(\text{CH}_3)\text{CH}_2\text{CH}_3$



c.

13.5: Polymers

Concept Review Exercises

1. What is a monomer? What is a polymer? How do polymer molecules differ from the molecules we have discussed in earlier sections of this chapter?
2. What is addition polymerization? What structural feature usually characterizes molecules used as monomers in addition polymerization?
3. What is the molecular formula of a polymer molecule formed by the addition polymerization of 175 molecules of vinyl chloride ($\text{CH}_2=\text{CHCl}$)?

Answers

1. Monomers are small molecules that can be assembled into giant molecules referred to as polymers, which are much larger than the molecules we discussed earlier in this chapter.
2. In addition polymerization, the monomers add to one another in such a way that the polymer contains all the atoms of the starting monomers.
3. $\text{C}_{350}\text{H}_{525}\text{Cl}_{175}$

Exercises

1. Write the condensed structural formula of the monomer from which Saran is formed. A segment of the Saran molecule has the following structure: $\text{CH}_2\text{CCl}_2\text{CH}_2\text{CCl}_2\text{CH}_2\text{CCl}_2\text{CH}_2\text{CCl}_2$.
2. Write the condensed structural formula for the section of a molecule formed from four units of the monomer $\text{CH}_2=\text{CHF}$.

Answer

1. $\text{H}_2\text{C}=\text{CCl}_2$

13.6: Alkynes

Concept Review Exercises

1. Briefly identify the important differences between an alkene and an alkyne. How are they similar?
2. The alkene $(\text{CH}_3)_2\text{CHCH}_2\text{CH}=\text{CH}_2$ is named 4-methyl-1-pentene. What is the name of $(\text{CH}_3)_2\text{CHCH}_2\text{C}\equiv\text{CH}$?
3. Do alkynes show cis-trans isomerism? Explain.

Answers

1. Alkenes have double bonds; alkynes have triple bonds. Both undergo addition reactions.
2. 4-methyl-1-pentyne

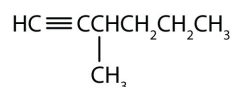
3. No; a triply bonded carbon atom can form only one other bond. It would have to have two groups attached to show cis-trans isomerism.

Exercises

- Draw the structure for each compound.
 - acetylene
 - 3-methyl-1-hexyne
- Draw the structure for each compound.
 - 4-methyl-2-hexyne
 - 3-octyne
- Name each alkyne.
 - $\text{CH}_3\text{CH}_2\text{CH}_2\text{C}\equiv\text{CH}$
 - $\text{CH}_3\text{CH}_2\text{CH}_2\text{C}\equiv\text{CCH}_3$

Answers

1. a. $\text{H}-\text{C}\equiv\text{C}-\text{H}$



b.

- a. 1-pentyne
b. 2-hexyne

13.7: Aromatic Compounds- Benzene

Concept Review Exercises

- How do the typical reactions of benzene differ from those of the alkenes?
- Briefly describe the bonding in benzene.
- What does the circle mean in the chemist's representation of benzene?

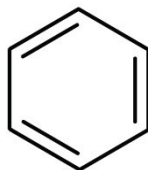
Answers

- Benzene is rather unreactive toward addition reactions compared to an alkene.
- Valence electrons are shared equally by all six carbon atoms (that is, the electrons are delocalized).
- The six electrons are shared equally by all six carbon atoms.

Exercises

- Draw the structure of benzene as if it had alternate single and double bonds.
- Draw the structure of benzene as chemists usually represent it today.

Answer



1.

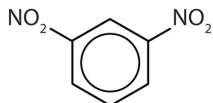
13.8: Structure and Nomenclature of Aromatic Compounds

Concept Review Exercises

- Briefly identify the important characteristics of an aromatic compound.
- What is meant by the prefixes *meta*, *ortho*, or *para*? Give the name and draw the structure for a compound that illustrates each.
- What is a phenyl group? Give the structure for 3-phenyloctane.

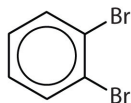
Answers

- An aromatic compound is any compound that contains a benzene ring or has certain benzene-like properties.
- meta* = 1,3 disubstitution; (answers will vary)



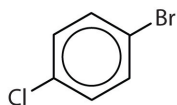
m-dinitrobenzene or 1,3-dinitrobenzene

ortho = 1,2 disubstitution



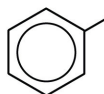
o-dibromobenzene or 1,2-dibromobenzene

para = 1,4 disubstitution or 1-bromo-4-chlorobenzene

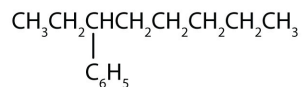


p-bromochlorobenzene or 1-bromo-4-chlorobenzene

- phenyl group: C_6H_5 or

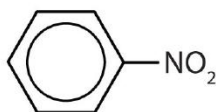


3-phenyloctane:

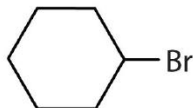


Exercises

- Is each compound aromatic?



a.

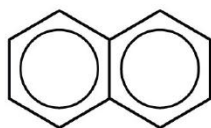


b.

2. Is each compound aromatic?



a.



b.

3. Draw the structure for each compound.

a. toluene

b. *m*-diethylbenzene

c. 3,5-dinitrotoluene

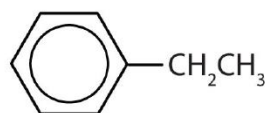
4. Draw the structure for each compound.

a. *p*-dichlorobenzene

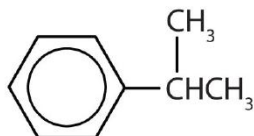
b. naphthalene

c. 1,2,4-trimethylbenzene

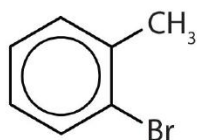
5. Name each compound with its IUPAC name.



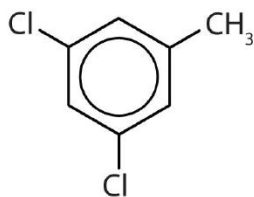
a.



b.

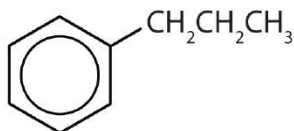


c.

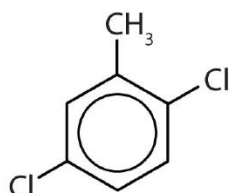


d.

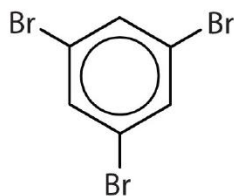
6. Name each compound with its IUPAC name.



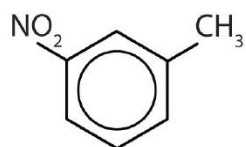
a.



b.



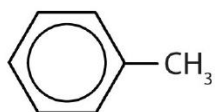
c.



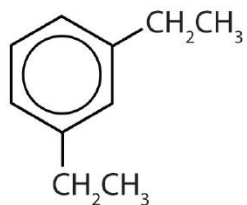
d.

Answers

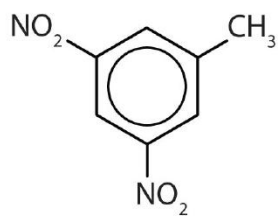
1. a. yes
- b. no



3. a.



b.

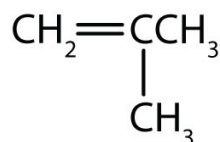


c.

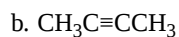
5. a. ethylbenzene
- b. isopropylbenzene
- c. *o*-bromotoluene
- d. 3,5-dichlorotoluene

Additional Exercises

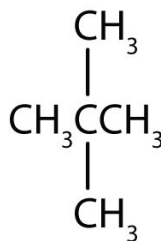
1. Classify each compound as saturated or unsaturated.



a.



2. Classify each compound as saturated or unsaturated.

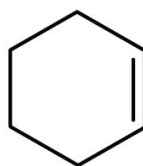


a.

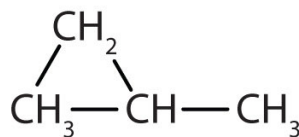


b.

3. Give the molecular formula for each compound.



a.




b.

4. When three isomeric pentenes—X, Y, and Z—are hydrogenated, all three form 2-methylbutane. The addition of Cl_2 to Y gives 1,2-dichloro-3-methylbutane, and the addition of Cl_2 to Z gives 1,2-dichloro-2-methylbutane. Draw the original structures for X, Y, and Z.

5. Pentane and 1-pentene are both colorless, low-boiling liquids. Describe a simple test that distinguishes the two compounds. Indicate what you would observe.

6. Draw and name all the alkene cis-trans isomers corresponding to the molecular formula C_5H_{10} . (Hint: there are only two.)

7. The complete combustion of benzene forms carbon dioxide and water:



Balance the equation. What mass, in grams, of carbon dioxide is formed by the complete combustion of 39.0 g of benzene?

8. Describe a physiological effect of some PAHs.

9. What are some of the hazards associated with the use of benzene?

10. What is wrong with each name? Draw the structure and give the correct name for each compound.

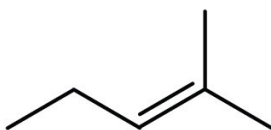
- 2-methyl-4-heptene
- 2-ethyl-2-hexene
- 2,2-dimethyl-3-pentene

11. What is wrong with each name?

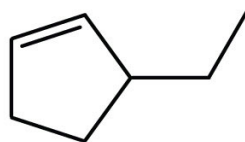
- 2-bromobenzene
- 3,3-dichlorotoluene
- 1,4-dimethylnitrobenzene

12. Following are line-angle formulas for three compounds. Draw the structure and give the name for each.

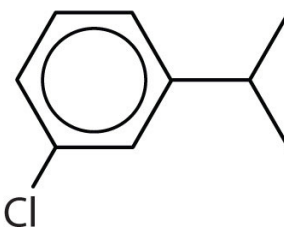
a.



b.

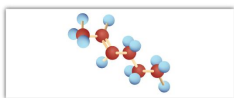


c.

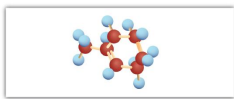


13. Following are ball-and-stick molecular models for three compounds (blue balls represent H atoms; red balls are C atoms). Write the condensed structural formula and give the name for each.

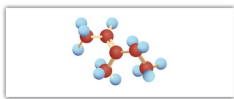
a.



b.



c.



Answers

1.

- a. unsaturated
- b. unsaturated

3.

- a. C_6H_{10}
- b. C_4H_8

5. Add bromine solution (reddish-brown) to each. Pentane will not react, and the reddish-brown color persists; 1-pentene will react, leaving a colorless solution.

7. $2C_6H_6 + 15O_2 \rightarrow 12CO_2 + 6H_2O$; 132 g

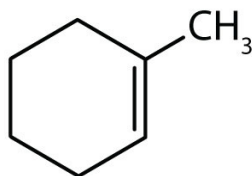
9. carcinogenic, flammable

11.

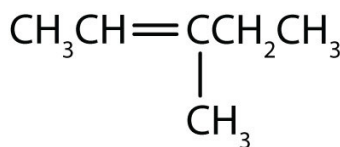
- a. number not needed
- b. can't have two groups on one carbon atom on a benzene ring
- c. can't have a substituent on the same carbon atom as the nitro group

13.

- a. $CH_3CH=CHCH_2CH_2CH_3$; 2-hexene



b.



c.

This page titled [13.E: Unsaturated and Aromatic Hydrocarbons \(Exercises\)](#) is shared under a [CC BY-NC-SA 3.0](#) license and was authored, remixed, and/or curated by [Anonymous](#) via [source content](#) that was edited to the style and standards of the LibreTexts platform; a detailed edit history is available upon request.

- [13.1: Alkenes- Structures and Names](#) by Anonymous is licensed [CC BY-NC-SA 3.0](#). Original source: <https://2012books.lardbucket.org/books/introduction-to-chemistry-general-organic-and-biological>.
- [13.2: Cis-Trans Isomers \(Geometric Isomers\)](#) by Anonymous is licensed [CC BY-NC-SA 3.0](#). Original source: <https://2012books.lardbucket.org/books/introduction-to-chemistry-general-organic-and-biological>.
- [13.3: Physical Properties of Alkenes](#) by Anonymous is licensed [CC BY-NC-SA 3.0](#). Original source: <https://2012books.lardbucket.org/books/introduction-to-chemistry-general-organic-and-biological>.
- [13.4: Chemical Properties of Alkenes](#) by Anonymous is licensed [CC BY-NC-SA 3.0](#). Original source: <https://2012books.lardbucket.org/books/introduction-to-chemistry-general-organic-and-biological>.
- [13.6: Alkynes](#) by Anonymous is licensed [CC BY-NC-SA 3.0](#). Original source: <https://2012books.lardbucket.org/books/introduction-to-chemistry-general-organic-and-biological>.

- **13.7: Aromatic Compounds- Benzene** by Anonymous is licensed [CC BY-NC-SA 3.0](https://creativecommons.org/licenses/by-nc-sa/3.0/). Original source: <https://2012books.lardbucket.org/books/introduction-to-chemistry-general-organic-and-biological>.
- **13.8: Structure and Nomenclature of Aromatic Compounds** by Anonymous has no license indicated. Original source: <https://2012books.lardbucket.org/books/introduction-to-chemistry-general-organic-and-biological>.

13.S: Unsaturated and Aromatic Hydrocarbons (Summary)

To ensure that you understand the material in this chapter, you should review the meanings of the bold terms in the following summary and ask yourself how they relate to the topics in the chapter.

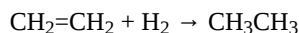
Any hydrocarbon containing either a double or triple bond is an **unsaturated hydrocarbon**. **Alkenes** have a carbon-to-carbon double bond. The general formula for alkenes with one double bond is C_nH_{2n} . Alkenes can be straight chain, branched chain, or cyclic. Simple alkenes often have common names, but all alkenes can be named by the system of the International Union of Pure and Applied Chemistry.

Cis-trans isomers (or geometric isomers) are characterized by molecules that differ only in their configuration around a rigid part of the structure, such as a carbon-to-carbon double bond or a ring. The molecule having two identical (or closely related) atoms or groups on the same side is the **cis isomer**; the one having the two groups on opposite sides is the **trans isomer**.

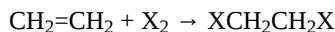
The physical properties of alkenes are quite similar to those of alkanes. Like other hydrocarbons, alkenes are insoluble in water but soluble in organic solvents.

More reactive than alkanes, alkenes undergo **addition reactions** across the double bond:

- Addition of hydrogen (**hydrogenation**):

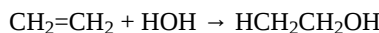


- Addition of halogen (**halogenation**):

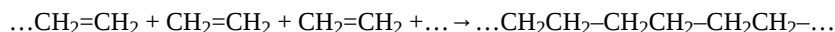


where X = F, Cl, Br, or I.

- Addition of water (**hydration**):



Alkenes also undergo **addition polymerization**, molecules joining together to form long-chain molecules.



The reactant units are **monomers**, and the product is a **polymer**.

Alkynes have a carbon-to-carbon triple bond. The general formula for alkynes is C_nH_{2n-2} . The properties of alkynes are quite similar to those of alkenes. They are named much like alkenes but with the ending *-yne*.

The cyclic hydrocarbon *benzene* (C_6H_6) has a ring of carbon atoms. The molecule seems to be unsaturated, but it does not undergo the typical reactions expected of alkenes. The electrons that might be fixed in three double bonds are instead *delocalized* over all six carbon atoms.

A hydrocarbon containing one or more benzene rings (or other similarly stable electron arrangements) is an **aromatic hydrocarbon**, and any related substance is an **aromatic compound**. One or more of the hydrogen atoms on a benzene ring can be replaced by other atoms. When two hydrogen atoms are replaced, the product name is based on the relative position of the replacement atoms (or atom groups). A 1,2-disubstituted benzene is designated as an *ortho* (*o-*) isomer; 1,3-, a *meta* (*m-*) isomer; and 1,4-, a *para* (*p-*) isomer. An aromatic group as a substituent is called an **aryl** group.

A **polycyclic aromatic hydrocarbon (PAH)** has fused benzene rings sharing a common side.

This page titled [13.S: Unsaturated and Aromatic Hydrocarbons \(Summary\)](#) is shared under a [CC BY-NC-SA 4.0](#) license and was authored, remixed, and/or curated by [Anonymous](#) via [source content](#) that was edited to the style and standards of the LibreTexts platform; a detailed edit history is available upon request.